
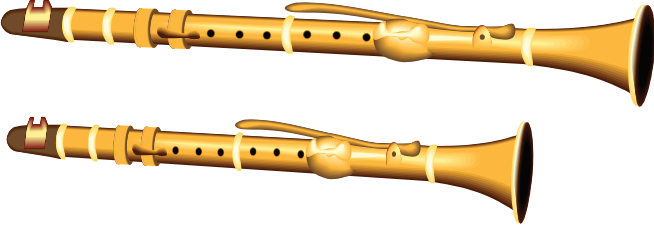
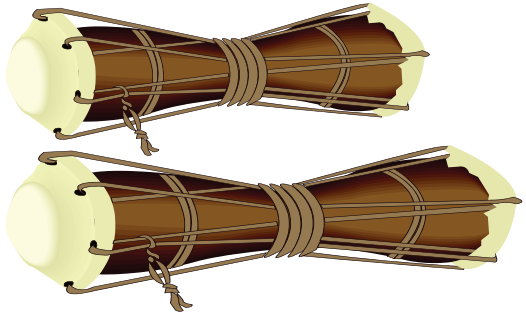



Name : \_\_\_\_\_ Class : \_\_\_\_\_

### Size

Longer or Shorter

|   |                                  |
|---|----------------------------------|
| <p>1.</p>  <p><input type="checkbox"/></p> <p><input type="checkbox"/></p>   | <p>Which object is longer ?</p>  |
| <p>2.</p>  <p><input type="checkbox"/></p> <p><input type="checkbox"/></p>  | <p>Which object is shorter ?</p> |
| <p>3.</p>  <p><input type="checkbox"/></p> <p><input type="checkbox"/></p> | <p>Which object is longer ?</p>  |
| <p>4.</p>  <p><input type="checkbox"/></p> <p><input type="checkbox"/></p> | <p>Which object is shorter ?</p> |