











Name : \_\_\_\_\_ Class : \_\_\_\_\_

## Comparing

Tick the correct answer

<p><b>A</b>  <input type="checkbox"/></p> <hr style="border-top: 1px dashed black;"/> <p><b>B</b>  <input type="checkbox"/></p>	<p>Which picture shows more ?</p>
<p><b>A</b>  <input type="checkbox"/></p> <hr style="border-top: 1px dashed black;"/> <p><b>B</b>  <input type="checkbox"/></p>	<p>Which picture shows less ?</p>
<p><b>A</b>  <input type="checkbox"/></p> <hr style="border-top: 1px dashed black;"/> <p><b>B</b>  <input type="checkbox"/></p>	<p>Which picture shows more ?</p>
<p><b>A</b>  <input type="checkbox"/></p> <hr style="border-top: 1px dashed black;"/> <p><b>B</b>  <input type="checkbox"/></p>	<p>Which picture shows less ?</p>
<p><b>A</b>  <input type="checkbox"/></p> <hr style="border-top: 1px dashed black;"/> <p><b>B</b>  <input type="checkbox"/></p>	<p>Which picture shows more ?</p>