

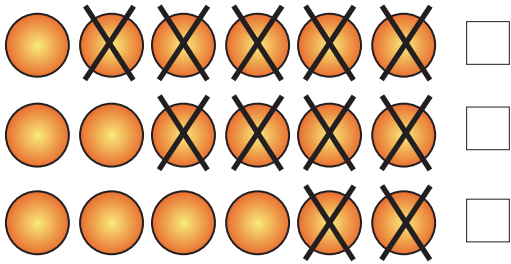
Name : \_\_\_\_\_ Class : \_\_\_\_\_

## Subtraction

Solve the problem and tick the picture that represents it

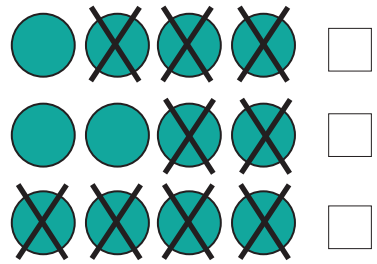
1.

$$6 - 4 =$$


☐
☐
☐

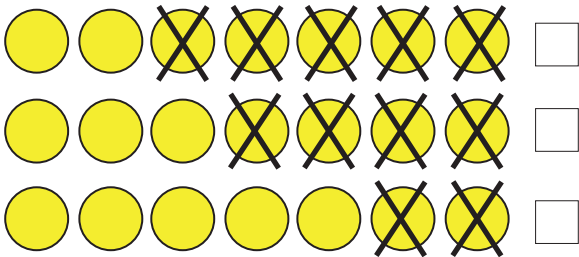
2.

$$4 - 4 =$$


☐
☐
☐

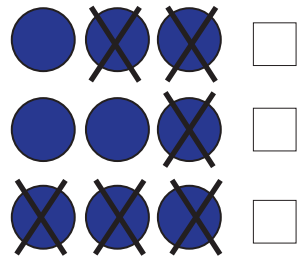
3.

$$7 - 5 =$$


☐
☐
☐

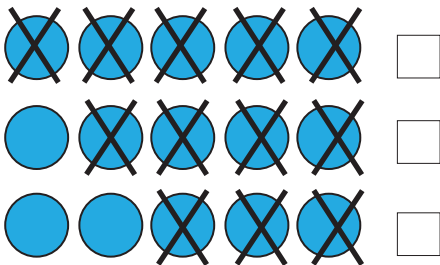
4.

$$3 - 1 =$$


☐
☐
☐

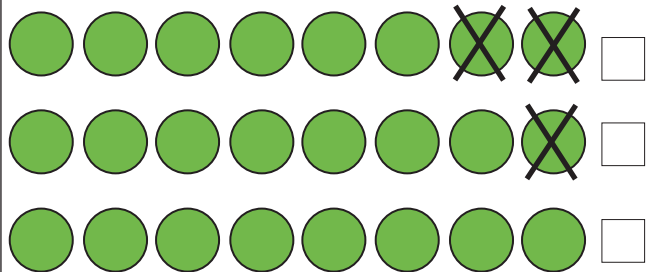
5.

$$5 - 3 =$$


☐
☐
☐

6.

$$8 - 2 =$$


☐
☐
☐